

### Problem 1. Energy during a burst of deceleration

A particle of charge  $e$  moves at constant velocity,  $\beta c$ , for  $t < 0$ . During the short time interval,  $0 < t < \Delta t$  its velocity remains in the same direction but its speed decreases linearly in time to zero. For  $t > \Delta t$ , the particle remains at rest.

(a) Show that the radiant energy emitted per unit solid angle is

$$\frac{dW}{d\Omega} = \frac{e^2 \beta^2}{64\pi^2 c \Delta t} \frac{(2 - \beta \cos \theta) [1 + (1 - \beta \cos \theta)^2] \sin^2 \theta}{(1 - \beta \cos \theta)^4} \quad (1)$$

(b) In the limit  $\gamma \gg 1$ , show that the angular distribution can be expressed as

$$\frac{dW}{d\xi} \simeq \frac{e^2 \beta^2}{4\pi c} \frac{\gamma^4}{\Delta t} \frac{\xi}{(1 + \xi)^4} \quad (2)$$

where  $\xi = (\gamma\theta)^2$ .

(c) Show for  $\gamma \gg 1$  that the total energy radiated is in agreement with the relativistic generalization of the Larmor formula.

## Problem 2. An oscillator radiating

- (a) Determine the time averaged power radiated per unit solid angle for a *non-relativistic charge* moving along the z-axis with instantaneous position,  $z(T) = H \cos(\omega_o T)$ .
- (b) Now consider relativistic charge executing simple harmonic motion. Show that the instantaneous power radiated per unit solid angle is

$$\frac{dP(T)}{d\Omega} = \frac{dW}{dT d\Omega} = \frac{e^2}{16\pi^2} \frac{c\beta^4}{H^2} \frac{\sin^2 \theta \cos^2(\omega_o T)}{(1 + \beta \cos \Theta \sin \omega_o T)^5} \quad (3)$$

Here  $\beta = \omega_o H/c$  and  $\gamma = 1/\sqrt{1 - \beta^2}$

- (c) In the relativistic limit the power radiated is dominated by the energy radiated during a short time interval around  $\omega_o T = \pi/2, 3\pi/2, 5\pi/2, \dots$ . Explain why. Where does the outgoing radiation point at these times.
- (d) Let  $\Delta T$  denote the time deviation from one of this discrete times, e.g.  $T = 3\pi/(2\omega_o) + \Delta T$ . Show that close to one of these time moments:

$$\frac{dP(\Delta T)}{d\Omega} = \frac{dW}{d\Delta T d\Omega} \simeq \frac{2e^2}{\pi^2} \frac{c\beta^4}{H^2} \gamma^6 \frac{(\gamma\omega_o\Delta T)^2(\gamma\theta)^2}{(1 + (\gamma\theta)^2 + (\gamma\omega_o\Delta T)^2)^5} \quad (4)$$

- (e) By integrating the results of the previous part over the  $\Delta T$  of a single pulse, show that the time averaged power is

$$\overline{\frac{dP(T)}{d\Omega}} = \frac{e^2}{128\pi^2} \frac{c\beta^4}{H^2} \gamma^5 \frac{5(\gamma\theta)^2}{(1 + (\gamma\theta)^2)^{7/2}} \quad (5)$$

- (f) Make rough sketches of the angular distribution for non-relativistic and relativistic motion.

### Problem 3. Periodic pulses

Consider a periodic motion that repeats itself with period  $\mathcal{T}_o$ . Show that the continuous frequency spectrum becomes a discrete spectrum containing frequencies that are integral multiples of the fundamental,  $\omega_o = 2\pi/\mathcal{T}_o$ .

Let the electric field from a single pulse (or period) be  $E_1(t)$ , *i.e.* where  $E_1(t)$  is non-zero between 0 and  $\mathcal{T}_o$  and vanishes elsewhere,  $t < 0$  and  $t > \mathcal{T}_o$ . Let  $E_1(\omega)$  be its Fourier transform.

- (a) Suppose that the wave form repeats once so that two pulses are received.  $E_2(t)$  consists of the first pulse  $E_1(t)$ , plus a second pulse,  $E_2(t) = E_1(t) + E_1(t - \mathcal{T}_o)$ . Show that the Fourier transform and the power spectrum is

$$E_2(\omega) = E_1(\omega) (1 + e^{i\omega\mathcal{T}_o}) \quad |E_2(\omega)|^2 = |E_1(\omega)|^2 (2 + 2\cos(\omega\mathcal{T}_o)) \quad (6)$$

- (b) Now suppose that we have  $n$  (with  $n$  odd) arranged almost symmetrically around  $t = 0$ , *i.e.*

$$E_n(t) = E_1(t + (n-1)\mathcal{T}_o/2) + \dots + E_1(t + \mathcal{T}_o) + E_1(t) + E_1(t - \mathcal{T}_o) + \dots + E_1(t - (n-1)\mathcal{T}_o/2), \quad (7)$$

so that for  $n = 3$

$$E_3(t) = E_1(t + \mathcal{T}_o) + E_1(t) + E_1(t - \mathcal{T}_o). \quad (8)$$

Show that

$$E_n(\omega) = E_1(\omega) \frac{\sin(n\omega\mathcal{T}_o/2)}{\sin(\omega\mathcal{T}_o/2)} \quad (9)$$

and

$$|E_n(\omega)|^2 = |E_1(\omega)|^2 \left( \frac{\sin(n\omega\mathcal{T}_o/2)}{\sin(\omega\mathcal{T}_o/2)} \right)^2 \quad (10)$$

- (c) By taking limits of your expressions in the previous part show that after  $n$  pulses, with  $n \rightarrow \infty$ , we find

$$E_n(\omega) = \sum_m E_1(\omega_m) \frac{2\pi}{\mathcal{T}_o} \delta(\omega - \omega_m) \quad (11)$$

and

$$|E_n(\omega)|^2 = \underbrace{n\mathcal{T}_o}_{\text{total time}} \times \sum_m |E_1(\omega_m)|^2 \frac{2\pi}{\mathcal{T}_o^2} \delta(\omega - \omega_m) \quad (12)$$

where  $\omega_m = 2\pi m/\mathcal{T}_o$ .

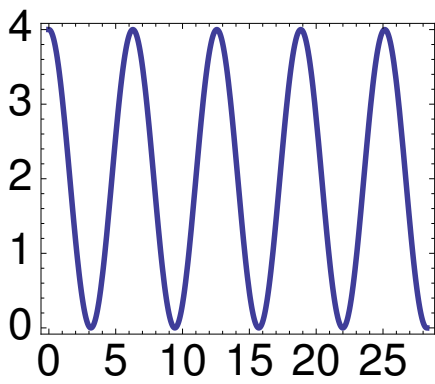
**Remark** We have in effect shown that if we define

$$\Delta(t) \equiv \sum_{n=-\infty}^{\infty} \delta(t - n\mathcal{T}_o). \quad (13)$$

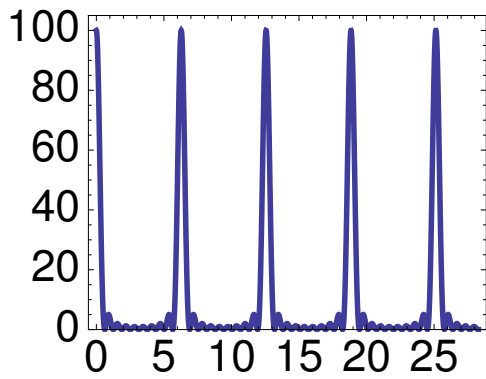
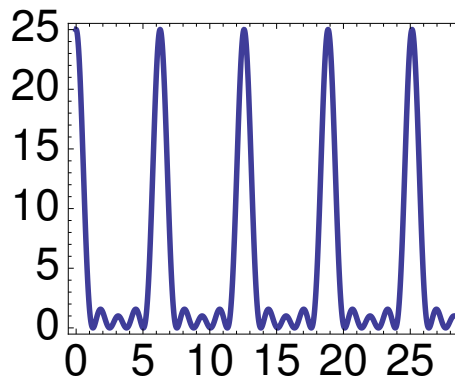
Then the Fourier transform of  $\Delta(t)$  is

$$\hat{\Delta}(\omega) = \sum_n e^{-i\omega n\mathcal{T}_o} = \sum_m \frac{2\pi}{\mathcal{T}_o} \delta(\omega - \omega_m). \quad (14)$$

$n = 2$



$n = 5$



$$\left( \frac{\sin(n\omega\mathcal{T}_o/2)}{\omega\mathcal{T}_o/2} \right)^2$$

$n = 10$

- (d) Show that a general expression for the time averaged power radiated per unit solid angle into each multipole  $\omega_m \equiv m\omega_o$  is:

$$\frac{dP_m}{d\Omega} = \frac{|rE(\omega_m)|^2}{\mathcal{T}_o^2} \quad (15)$$

Or

$$\frac{d\hat{P}_m}{d\Omega} = \frac{e^2\omega_o^4 m^2}{32\pi^4 c^3} \left| \int_0^{\mathcal{T}_o} \mathbf{v}(T) \times \mathbf{n} \exp \left[ i\omega_m \left( T - \frac{\mathbf{n} \cdot \mathbf{r}_*(T)}{c} \right) \right] \right|^2 dT, \quad (16)$$

Here  $d\hat{P}_m/d\Omega$  is defined so that over along time period  $\Delta\mathcal{T}$ , the energy per solid angle is

$$\frac{dW}{d\Omega} = \Delta\mathcal{T} \sum_{m=1}^{\infty} \frac{d\hat{P}_m}{d\Omega} \quad (17)$$

Also note that we are summing only over the positive values of  $m$  which is different from how we had it in class:

$$\frac{d\hat{P}_m}{d\Omega} \equiv \frac{dP_m}{d\Omega} + \frac{dP_{-m}}{d\Omega} \quad (18)$$

#### Problem 4. Radiation spectrum of a SHO

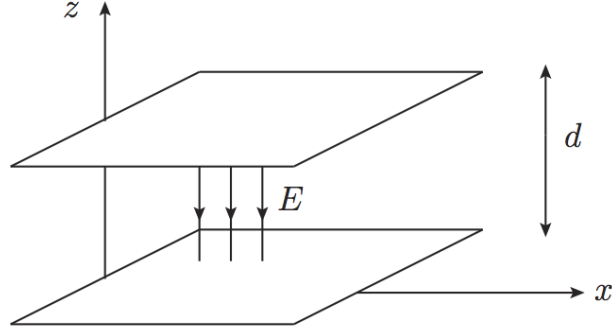
- (a) Show that for the simple harmonic motion of a charge discussed in Problem 2 the average power radiated per unit solid angle in the  $m$ -th harmonic is

$$\frac{d\hat{P}_m}{d\Omega} = \frac{e^2 c \beta^2}{8\pi^2 H^2} m^2 \tan^2 \theta [J_m(m\beta \cos \theta)]^2 \quad (19)$$

- (b) Show that in the non-relativistic limit the total power radiated is all in the fundamental and has the value

$$P = \frac{e^2}{4\pi} \frac{2}{3} \omega_o^4 \overline{H^2} \quad (20)$$

where  $\overline{H^2}$  is the mean squared amplitude of the oscillation.



### Problem 5. Physics of the relativistic stress tensor

Consider a capacitor at rest. The area of each plate is  $A$ , and the electric field between the plates is  $E$ . The plates are orthogonal to the  $x$ -axis (see figure). The rest mass of each plate is  $M_{\text{pl}}$ . The plates are kept a distance  $d$  apart by four thin columns (not shown). We assume that each of these columns have mass  $M_{\text{col}}$ , and there is a stress tensor in the columns due to the electric attraction of the plates. (There is also a surface stress tensor in the plates due to the electric repulsion of the charges on the plates, but you won't need this.)

- (a) Write down the expression for the energy-momentum tensor of the electromagnetic field  $\Theta_{\text{em}}^{\mu\nu}$  in terms of the Maxwell field strength  $F^{\mu\nu}$ . Show that the total rest mass  $Mc^2 = \int d^3r \Theta_{\text{tot}}^{00}$  of the capacitor setup is:

$$M_{\text{tot}}c^2 = 2M_{\text{pl}}c^2 + 4M_{\text{col}}c^2 + \frac{1}{2}E^2 Ad \quad (21)$$

**Remark.** In practice the field term is very small compared to the first two terms, but we will include its effect in this problem.

- (b) Determine the non-vanishing components of the electromagnetic stress tensor integrated over space:

$$\int d^3r \Theta_{\text{em}}^{\alpha\beta}. \quad (22)$$

(Hints:  $\int \Theta_{\text{em}}^{xx}$ ,  $\int \Theta_{\text{em}}^{yy}$ ,  $\int \Theta_{\text{em}}^{zz}$ ,  $\int \Theta_{\text{em}}^{00}$  are non-zero. )

- (c) Show that for a stationary configuration that

$$\int d^3r \Theta_{\text{tot}}^{ij}(\mathbf{r}) = 0 \quad (23)$$

(Hints: Explain why  $\partial_k \Theta_{\text{tot}}^{kj} = 0$ , and then study the expression  $\partial_k (x^i \Theta_{\text{tot}}^{kj})$  )

- (d) Determine  $\int_{\text{col}} \Theta_{\text{mech}}^{zz}$  in the columns, and interpret your result physically by showing the forces involved with a free body diagram.
- (e) Consider now an observer in frame  $K$  who is moving in the positive  $z$ -direction with velocity  $v$  relative to the rest frame of the capacitor. According to special relativity the energy of the capacitor in frame  $K$  is  $\gamma Mc^2$  where  $\gamma = (1 - (v/c)^2)^{1/2}$ .

- (i) Show that the integrated electromagnetic stress tensor in frame  $K$ ,  $\Theta_{\text{em}}^{00}$ , is

$$\int d^3\underline{r} \Theta_{\text{em}}^{00}(\underline{r}) = \frac{1}{2} E^2 A d \sqrt{1 - (v/c)^2} \quad (24)$$

Here  $\underline{r}$  are the boosted coordinates.

- (ii) Show that the integrated mechanical stress tensor including the plates and the columns

$$\int d^3\underline{r} \Theta_{\text{mech}}^{00}(\underline{r}) = \gamma (2M_{\text{pl}}c^2 + 4M_{\text{col}}c^2) + \frac{1}{2} E^2 A d \frac{(v/c)^2}{\sqrt{1 - (v/c)^2}} \quad (25)$$

- (iii) Use these results to compute

$$\int d^3\underline{r} \Theta_{\text{tot}}^{00}(\underline{r}) \quad (26)$$

in frame  $K$  and comment on the simple result.